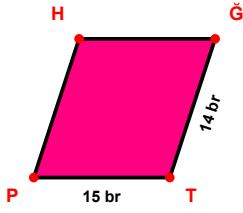
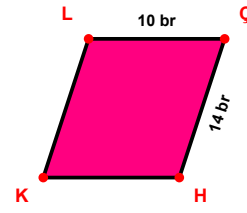


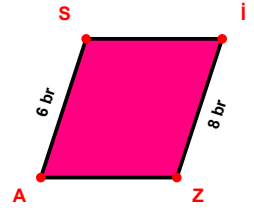
SORU: Aşağıdaki şekillerde verilen, kenar uzunlukları farklarını bulunuz.



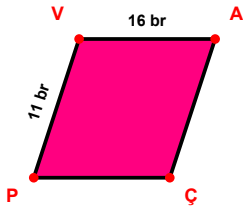
$$|TP| - |GT| = \dots\dots\dots$$



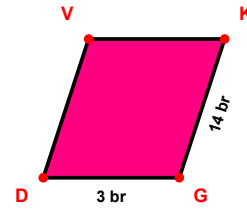
$$|CH| - |LC| = \dots\dots\dots$$



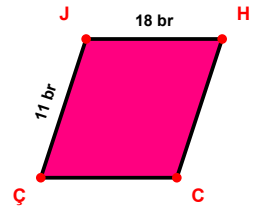
$$|İZ| - |AS| = \dots\dots\dots$$



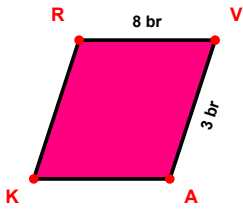
$$|VA| - |PV| = \dots\dots\dots$$



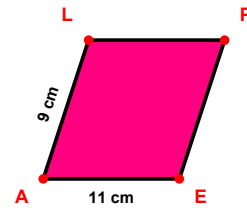
$$|KG| - |GD| = \dots\dots\dots$$



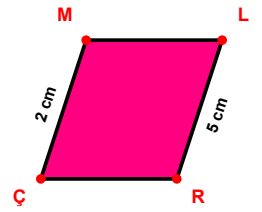
$$|JH| - |ÇJ| = \dots\dots\dots$$



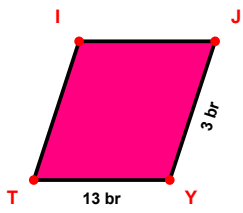
$$|RV| - |VA| = \dots\dots\dots$$



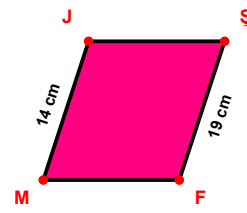
$$|EA| - |AL| = \dots\dots\dots$$



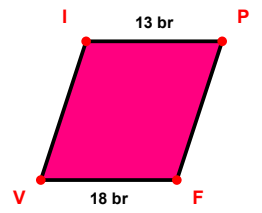
$$|LR| - |ÇM| = \dots\dots\dots$$



$$|YT| - |JY| = \dots\dots\dots$$

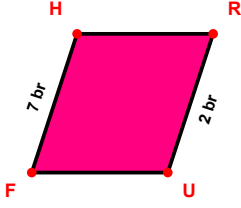


$$|ŞF| - |MJ| = \dots\dots\dots$$

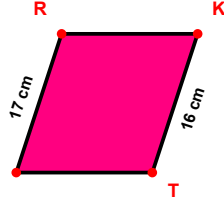


$$|FV| - |İP| = \dots\dots\dots$$

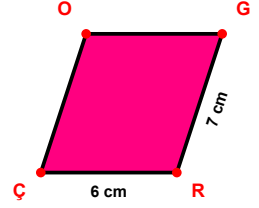
SORU: Aşağıdaki şekillerde verilen, kenar uzunlukları farklarını bulunuz.



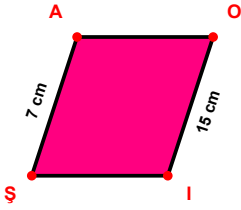
$$|FH| - |RU| = \dots\dots$$



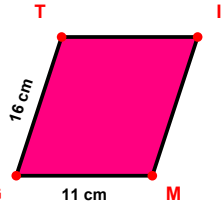
$$|RI| - |KT| = \dots\dots$$



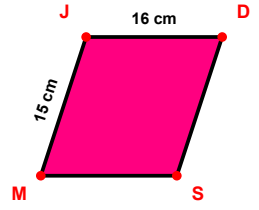
$$|GR| - |ÇR| = \dots\dots$$



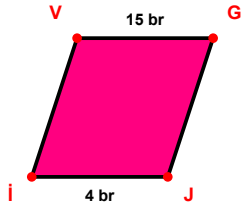
$$|OI| - |ŞA| = \dots\dots$$



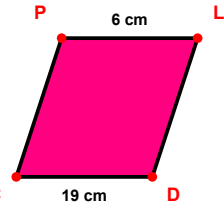
$$|ĖT| - |ĖM| = \dots\dots$$



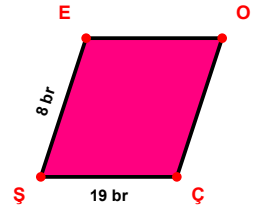
$$|JD| - |MJ| = \dots\dots$$



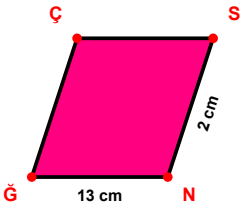
$$|VG| - |İJ| = \dots\dots$$



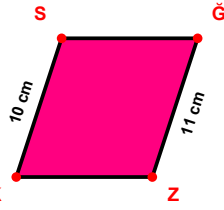
$$|DÇ| - |PL| = \dots\dots$$



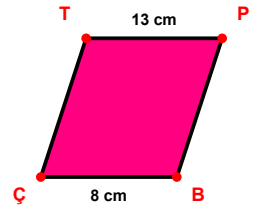
$$|ÇŞ| - |ŞE| = \dots\dots$$



$$|NĞ| - |SN| = \dots\dots$$



$$|ĞZ| - |KS| = \dots\dots$$



$$|TP| - |BÇ| = \dots\dots$$

SÜREÇ ODAKLI DEĞERLENDİRME ÖLÇEĞİ

Doğru Sayısı: / 24

Öğretmen ilgili kutucuğu işaretler.

Geliştirilmeli (0-8)

İyi (9-14)

Çok İyi (15-20)

Mükemmel (21-24)

☐
☐
☐
☐

Hazırlayan:

Bu bölüme sınıfınızın ilgili kazanıma yönelik genel durumuna ilişkin gözlem ve izlenimlerinizi, öğrencilerinizin bu kazanımla ilgili öğrenme eksikliklerini ve bu eksikliklerin giderilmesi amacıyla yaptığınız/yapmayı planladığınız faaliyetleri not edebilirsiniz.

No	Adı - Soyadı	Toplam Puan	Değerlendirme
1			
2			
3			
4			
5			
6			
7			
8			
9			
10			
11			
12			
13			
14			
15			
16			
17			
18			
19			
20			
21			
22			
23			
24			
25			
26			
27			
28			
29			
30			
31			
32			
33			
34			
35			

Hazırlayan: